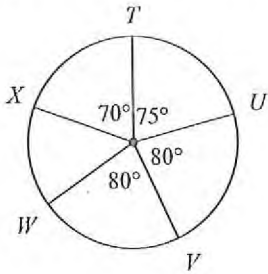


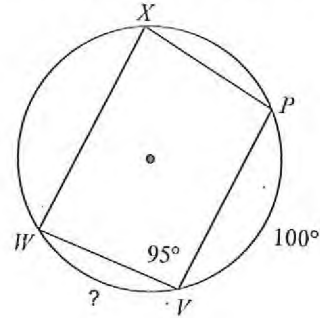
CFU: Central and Inscribed Angles

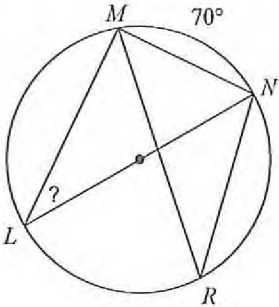
Name _____ *||

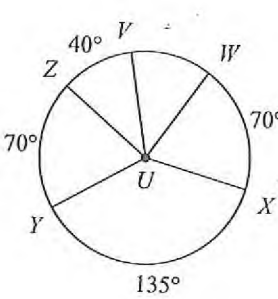
1) Find $m\widehat{TVX}$.



2) Find $m\widehat{WV}$.



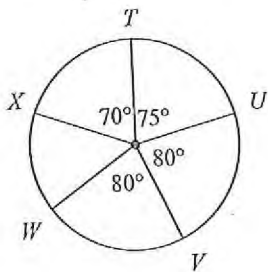
3)  Find $m\angle MLN$.

4)  Find $m\angle YUW$.

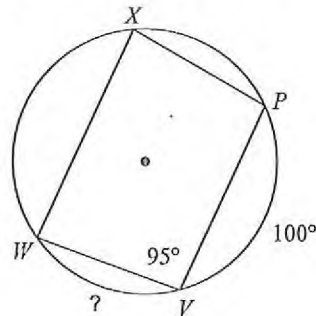
CFU: Central and Inscribed Angles

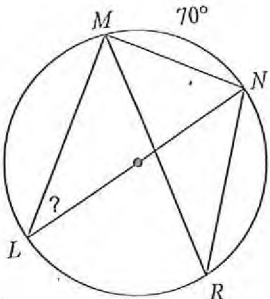
Name _____ *||

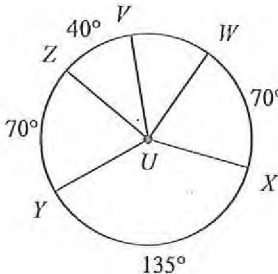
1) Find $m\widehat{TVX}$.



2) Find $m\widehat{WV}$.



3)  Find $m\angle MLN$.

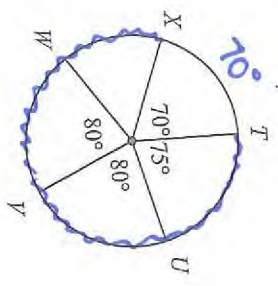
4)  Find $m\angle YUW$.

CFU: Central and Inscribed Angles

4 pts Name Key

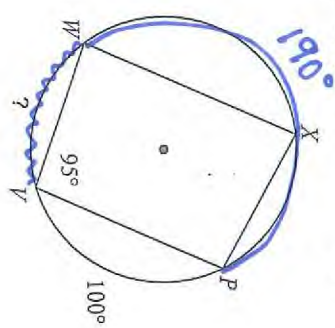
*11

① Find $m\widehat{TVX}$.



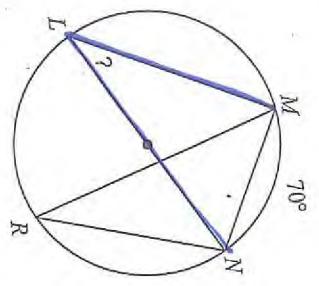
$360^\circ - 70^\circ - 75^\circ - 80^\circ - 80^\circ = 290^\circ$

② Find $m\widehat{WV}$.



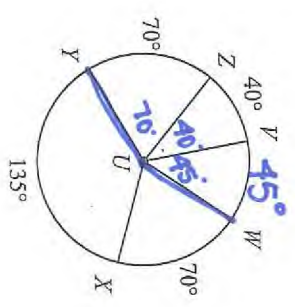
$360^\circ - 190^\circ - 95^\circ - 100^\circ = 70^\circ$

③



Find $m\angle MLN$.
 $70^\circ \div 2 = 35^\circ$

④



Find $m\angle YUV$.
 $40^\circ + 45^\circ + 70^\circ = 155^\circ$