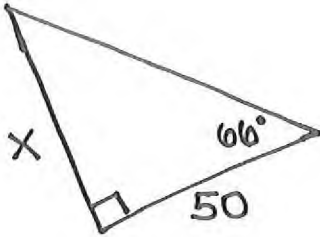


Name: _____ *12

CFU: Finding Missing Side

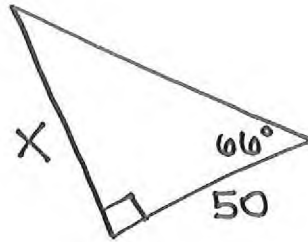
Find the value of x . Round to the nearest hundredth.



Name: _____ *12

CFU: Finding Missing Side

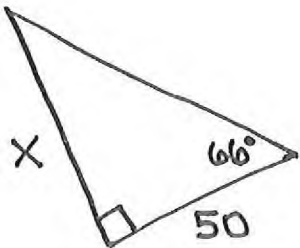
Find the value of x . Round to the nearest hundredth.



Name: _____ *12

CFU: Finding Missing Side

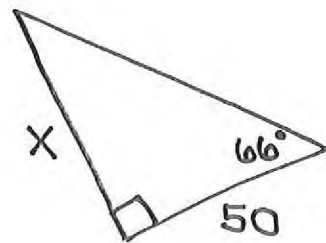
Find the value of x . Round to the nearest hundredth.



Name: _____ *12

CFU: Finding Missing Side

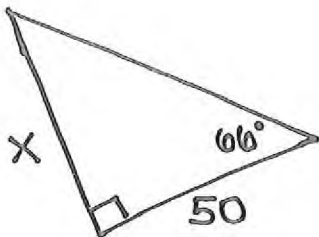
Find the value of x . Round to the nearest hundredth.



Name: _____ *12

CFU: Finding Missing Side

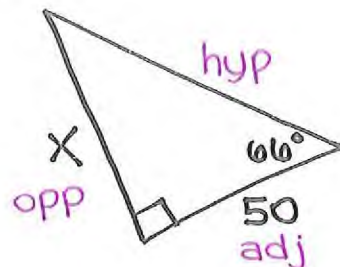
Find the value of x . Round to the nearest hundredth.



Name: Key *12

CFU: Finding Missing Side

Find the value of x . Round to the nearest hundredth.



$$50 \cdot \tan 66^\circ = \frac{x}{50} \cdot 50$$

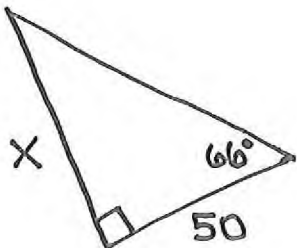
$$50 \cdot \tan 66^\circ = x$$

$$\boxed{112.30 = x}$$

Name: _____ *12

CFU: Finding Missing Side

Find the value of x . Round to the nearest hundredth.



Name: _____ *12

CFU: Finding Missing Side

Find the value of x . Round to the nearest hundredth.

