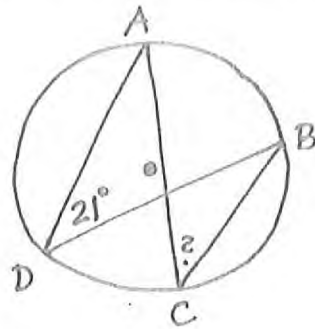


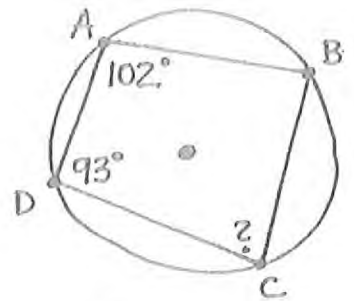
# CFU - Central + Inscribed Angles 2

\_\_\_\_\_  
Name

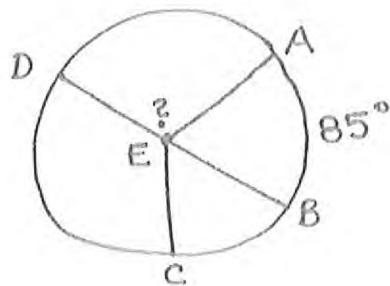
①



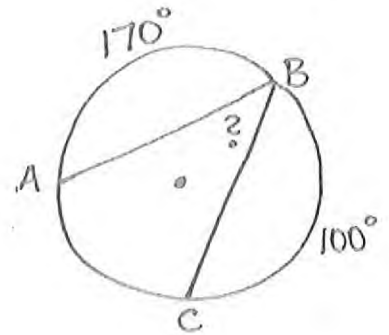
②



③



④



Answers:

①  $m\angle ACB =$  \_\_\_\_\_

②  $m\angle DCB =$  \_\_\_\_\_

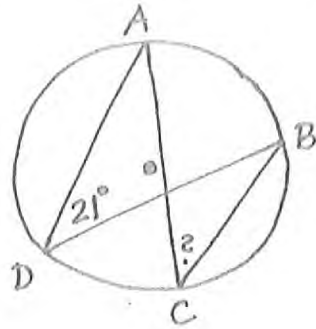
③  $m\angle AED =$  \_\_\_\_\_

④  $m\angle ABC =$  \_\_\_\_\_

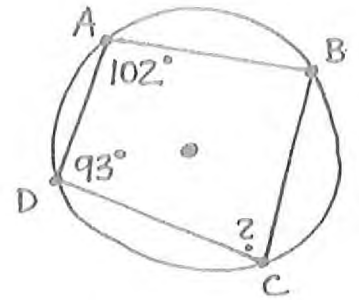
# CFU - Central + Inscribed Angles 2

Key  
Name \_\_\_\_\_

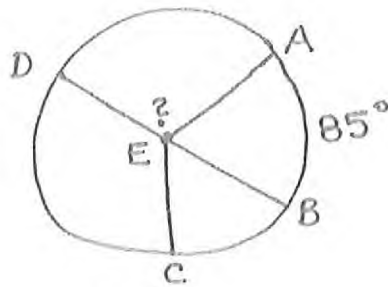
①



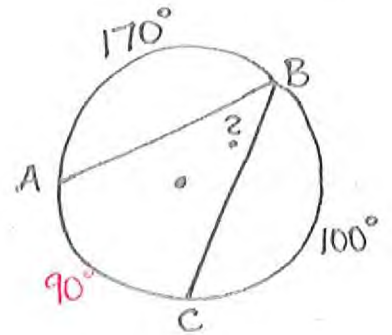
②



③



④



Answers:

①  $m\angle ACB = \underline{21^\circ}$

②  $m\angle DCB = \underline{78^\circ}$

③  $m\angle AED = \underline{95^\circ}$

④  $m\angle ABC = \underline{45^\circ}$